


**GRADE: 1**  
**NAME:**  
**TOPIC: Addition**

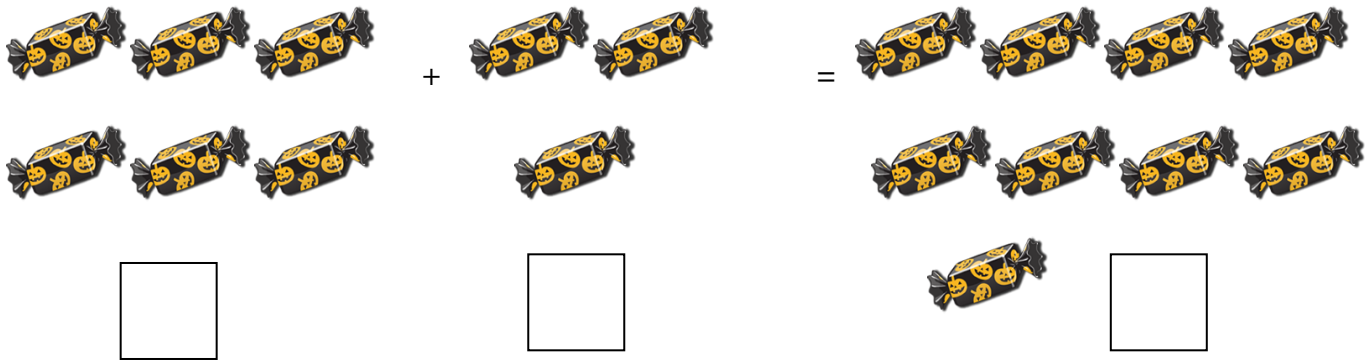
**SUBJECT: Math**  
**DATE:**  
**LEVEL:1**

1. Count the objects and add the numbers:

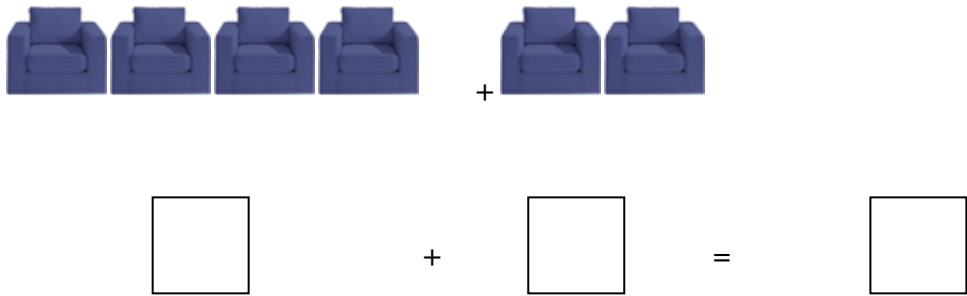
1.



2.



3.

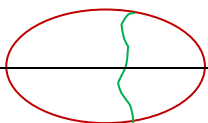


4.

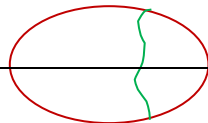


2. Fill in the balloons.

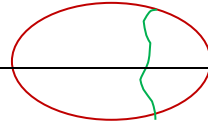
1.



2.



3.



$3+0$

$0+6$

$2+3$

4.

$$\begin{array}{c} 4+2 \\ \hline \hline \end{array}$$

5.

$$\begin{array}{c} 5+4 \\ \hline \hline \end{array}$$

6.

$$\begin{array}{c} 5+4 \\ \hline \hline \end{array}$$

3. Add the following:

$$\begin{array}{r} 3 \\ + 2 \\ \hline \\ \hline \end{array}$$

$$\begin{array}{r} 4 \\ + 3 \\ \hline \\ \hline \end{array}$$

$$\begin{array}{r} 2 \\ + 7 \\ \hline \\ \hline \end{array}$$

$$\begin{array}{r} 1 \\ 2 \\ + 3 \\ \hline \\ \hline \end{array}$$

$$\begin{array}{r} 3 \\ 4 \\ + 1 \\ \hline \\ \hline \end{array}$$

$$\begin{array}{r} 6 \\ 1 \\ + 2 \\ \hline \\ \hline \end{array}$$