

Name :

Class : I

Sub:Math worksheet

Date of Issue :

Date of Submission

Add the following:

$2 + 8 = \underline{\quad}$

$1 + 7 = \underline{\quad}$

$2 + 0 = \underline{\quad}$

$5 + 5 = \underline{\quad}$



$2 + 2 = \underline{\quad}$



$1 + 2 = \underline{\quad}$



$6 + 0 = \underline{\quad}$



$3 + 1 = \underline{\quad}$

Use the picture to add:

4	
+	
	<u>3</u>
	<input type="text"/>

9	
+	
	<u>0</u>
	<input type="text"/>

2	
+	
	<u>2</u>
	<input type="text"/>

5	
+	
	<u>5</u>
	<input type="text"/>

Add the Following:

$\begin{array}{r} 7 \\ + 3 \\ \hline \end{array}$	$\begin{array}{r} 5 \\ + 1 \\ \hline \end{array}$	$\begin{array}{r} 8 \\ + 0 \\ \hline \end{array}$	$\begin{array}{r} 2 \\ + 2 \\ \hline \end{array}$
$\begin{array}{r} 7 \\ + 2 \\ \hline \end{array}$	$\begin{array}{r} 5 \\ + 3 \\ \hline \end{array}$	$\begin{array}{r} 6 \\ + 0 \\ \hline \end{array}$	$\begin{array}{r} 4 \\ + 1 \\ \hline \end{array}$

Add the Following:

1. I have 5 red fish

7 blue fish

 $+$

And 2 yellow fish

 $+$

How many fish do I have in all?

2. Mary has 2 dogs

3 cats and

 $+$

2 parrots

 $+$

How many pets does she have in all?
